



# Vector Training Center

## Assessment 1

Learning Outcome	Maximum Marks	Marks Obtained
1 & 2	10	
Instructions	Answer all 10 Questions Choose and circle the correct choice	

1. What is the unit of Current ?

a) Ampere, b) Hertz, c) Volt, d) Ohm

2. What is the Three phase line voltage in UAE ?

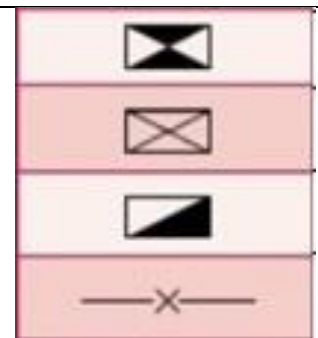
a) 220V, b) 440V, c) 230V, d) 400V

3. What is the name of this tool ?



a) Cable cutter, b) Wire Stripper, c) Crimping tool d) Cable Puller

4. Which is the symbol of Main Distribution board (MDB)?

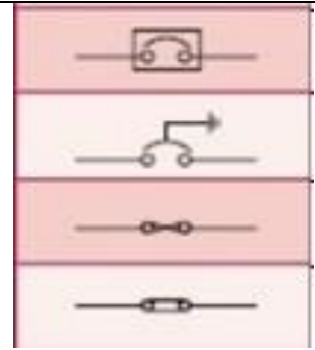




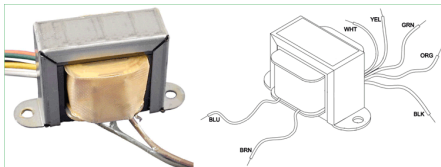
# Vector Training Center

## Assessment 1

5. Which is the symbol of Miniature Circuit Breaker (MCB) ?



6. Identify the component :



- a) Circuit Breaker, b) Switch, c) Transformer  
d) Relay

7. Identify the instrument :



- a) Clamp meter, b) Earth Resistance Tester,  
c) Insulation Tester, d) Cable Detector

8 Which is the proper tool used to remove insulation from a wire ?

- a) Wire stripper, b) Nose plier, c) Hammer, d) Cutter

9. What is the unit of Electric Power?

- a) Ohm, b) Watt, c) Ampere, d) Volt

10. Which instrument is used to measure current ?

- a) Ammeter, b) Ohm meter, c) Volt meter, d) Watt meter